



Nelson Primary School  
Inspiring Ambition, Achieving Success  
Weekly Homework Tasks

Key Stage 1

Year 2

W/C 17.10.22

Homework books **must be in school on Monday** and will be returned on Tuesday.

## Reading

Please read aloud to an adult every day for about 15 minutes and date your reading record with the pages read. You need to understand what you are reading and be able to show this in your Accelerated Reader test.

**Remember to bring your reading book and reading record to school every day.** Please visit Nelson School Library or East Ham Library for your books.

## Maths

This week we are learning about number families. We have been writing addition and subtraction facts about a number:

Example

●	●		
●	●		
●	●		
●	●		
●	●	●	●

$$\textcircled{10} + \textcircled{2} = \textcircled{12}$$
$$\textcircled{2} + \textcircled{10} = \textcircled{12}$$
$$\textcircled{12} - \textcircled{2} = \textcircled{10}$$
$$\textcircled{12} - \textcircled{10} = \textcircled{2}$$

Please complete attached sheet.

You will be tested on this on Monday in a time limit.

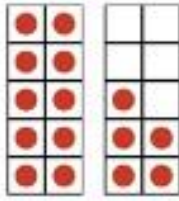
## Spelling - your spelling words this week:

**hold hour improve because kind last many mind money most**

1. You must ensure you know the meaning of the word. -use a dictionary to help you if you are unsure.

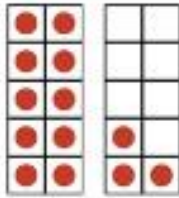
2. Practise and study all of the spelling words ready for the **Monday Spelling Test.**

# Number family facts



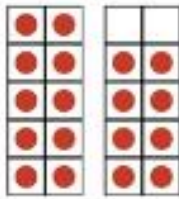
$$\square + \square = \square$$
$$\square + \square = \square$$

$$\square - \square = \square$$
$$\square - \square = \square$$




$$\square + \square = \square$$
$$\square + \square = \square$$

$$\square - \square = \square$$
$$\square - \square = \square$$




$$\square + \square = \square$$
$$\square + \square = \square$$

$$\square - \square = \square$$
$$\square - \square = \square$$



$$\square + \square = \square$$
$$\square + \square = \square$$

$$\square - \square = \square$$
$$\square - \square = \square$$



$$\square + \square = \square$$
$$\square + \square = \square$$

$$\square - \square = \square$$
$$\square - \square = \square$$