



Nelson Primary School  
Inspiring Ambition, Achieving Success  
Weekly Homework Tasks

Key Stage 1 Year 2

W/C 30.10.23

Homework books **must be in school on Monday** and will be returned on Tuesday.

**Reading**

Please read aloud to an adult every day for about 15 minutes. Parents must sign your reading record every day to show that you've read. Date and sign with the pages which have been read. If you have an AR book, you will take an AR test at school to show your understanding. **Remember to bring your reading book and reading record to school every day.** Please visit Nelson School Library or East Ham Library for your books.

**Maths**

This week we are learning about number families. We have been writing addition and subtraction facts about a number:

Example

●	●		
●	●		
●	●		
●	●		
●	●	●	●

$10 + 2 = 12$        $12 - 2 = 10$   
 $2 + 10 = 12$        $12 - 10 = 2$

Please complete the attached sheet. You will be tested on this on Monday.


**Spelling - your spelling words this week:**

Move old parents pass path people because plant poor only

1. You must ensure you know the meaning of the word.
2. Practise and study all of the spelling words ready for the Monday Spelling Test.

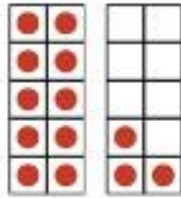
**Optional:** Log on to <https://www.edshed.com> using your edshed login. Practise and play on Spelling Shed and Maths Shed.

## Number family facts




$$\square + \square = \square$$
$$\square + \square = \square$$

$$\square - \square = \square$$
$$\square - \square = \square$$




$$\square + \square = \square$$
$$\square + \square = \square$$

$$\square - \square = \square$$
$$\square - \square = \square$$




$$\square + \square = \square$$
$$\square + \square = \square$$

$$\square - \square = \square$$
$$\square - \square = \square$$



$$\square + \square = \square$$
$$\square + \square = \square$$

$$\square - \square = \square$$
$$\square - \square = \square$$



$$\square + \square = \square$$
$$\square + \square = \square$$

$$\square - \square = \square$$
$$\square - \square = \square$$